

Introduction

Jade and Simon are going on a nature trail.

The tasks are about the nature trail.

Task 1

(4 marks)

A map of the nature trail costs £2.50.

Show how Jade and Simon can pay for the map.

Use the money your assessor has given you.

Task 2

(5 marks)

Jade and Simon buy some food to eat on the way.

The food costs £5.20.

Jade also buys a drink. It costs 95p.

Show how to pay for all the items.

Use the money your assessor has given you.

Task 3

(2 marks)

Look at the map on the next page. At the start, Jade turns right.

a. Where is Jade going? Tick your answer. (1 mark)

Café

Visitor Centre

- b. Simon wants to go to the boat lake. Is this in the middle of the map?

Tick your answer.

(1 mark)

Yes

No




Woodland




Picnic Area

Boat Lake



Café



Visitor Centre



Task 4**(2 marks)**

Look at the map again.

Tick all of the statements which you think are true.

A	The boat lake is the biggest place on the map	
B	The boats are two different sizes	
C	The picnic area has two tables	
D	The café is next to the woodland	

Assessment continues on the next page

Task 5

(4 marks)

Jade and Simon look at the drawings below to help them find the tallest tree.

- a. Put the trees in height order.

Start with the shortest first.

Draw a line to match a tree to a number.

(3 marks)

1

2

3

4



A



B



C



D

- b. Which is the widest tree?

Tick **one** letter.

(1 mark)

Task 6**(2 marks)**

Jade has taken a picture of a butterfly.


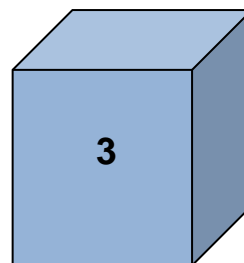
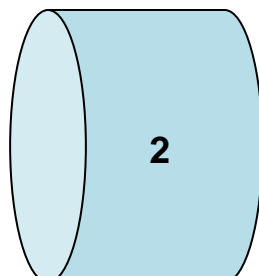

She says that the wings are triangle shape.

Draw a triangle in the box below to show that Jade is wrong.

**Task 7****(4 marks)**

Simon looks in the trees for bird nest boxes. He tells Jade they are cube shape.

- a.** Tick a shape below to show the cube. (1 mark)
- b.** Draw a line to match the three labels to a shape. (3 marks)



Circle

Square

Cylinder

Task 8**(7 marks)**

Simon and Jade keep a count of some of the wildlife.

They note how many of each animal they see.


- a. If you agree with their totals tick the **Totals** box that you agree with.
- b. Cross out any wrong totals and write in a new total.

	Squirrels	Rabbits	Swans	Magpies
Jade	2	3	3	4
Simon	5	1	5	1
Totals	7	5	7	3

Task 9

(4 marks)

Look at the photograph below.



Simon says he thinks that swans and ducks are the same weight.

Jade says swans weigh more.

a. Who do you think is correct?

Write your answer here

(1 mark)

b. Give the reasons why. Put your reasons in the space below.

(3 marks)