

## **Introduction**

You work with Ali and Dan at a garden centre. The tasks are about you and your job.

### **Task 1**

**(4 marks)**

You owe 9 pence to your friend Ali.

Which coins can you use to pay Ali? Choose from the coins your Assessor has given you.

**Task 2****(4 marks)**

Look at the coins and the paper money your Assessor has given you.

The money has to be sorted to go in the till.

Put all the money in order of value.

### Task 3

(3 marks)

Show the value of this voucher using the money your Assessor has given you.




## Task 4

(4 marks)

The garden centre has a new set of plant pots to sell.

- Match each label to a plant pot.
- What shape is on the pot with no label?

Put your answer in this box.



Original image from:  
<http://www.ikea.com/gb/en/catalog/products/10155732>

## Task 5

(4 marks)

There are 3 shelves below.

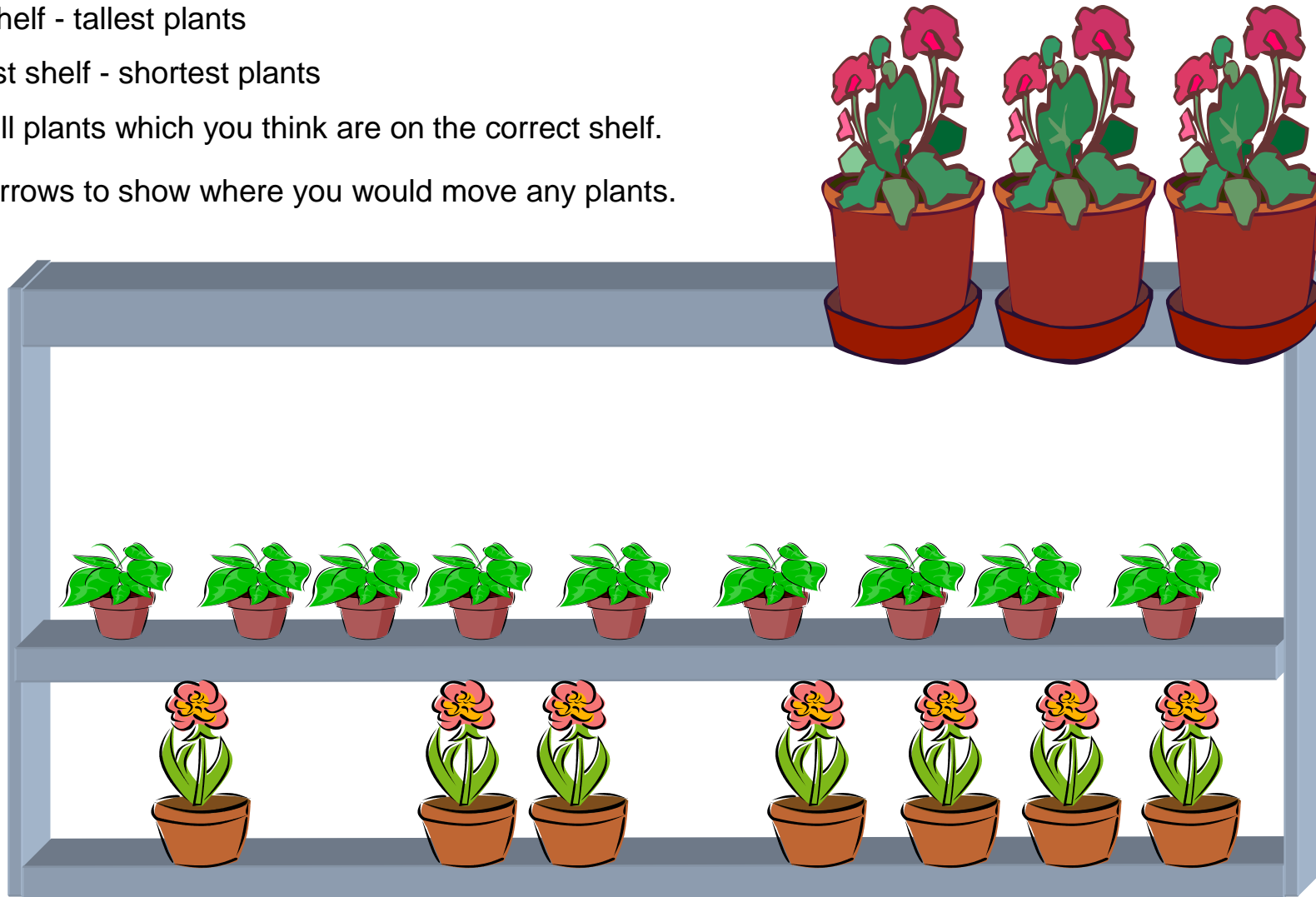
These plants should be displayed in height order on the shelves.

Top shelf - tallest plants

Lowest shelf - shortest plants

Tick all plants which you think are on the correct shelf.

Use arrows to show where you would move any plants.



### Task 6

(2 marks)

The bird feeders need sorting.

Large feeders go on the right side of the shelf.

Small feeders go on the left side of the shelf.

Draw arrows to show where you would put all the feeders.



Images from <http://shopping.rspb.org.uk/c/BirdFeeders.htm>

## Task 7

(5 marks)

The Wild Bird Peanuts are sold in three sizes. Ali has counted all the stock.

If you agree with Ali's totals, tick each box.

Cross out any wrong totals and write in a new total.



5 kg bag

2



2.5 kg bag

5



1 kg bag

1

Images from <http://thegardenfactory.co.uk>

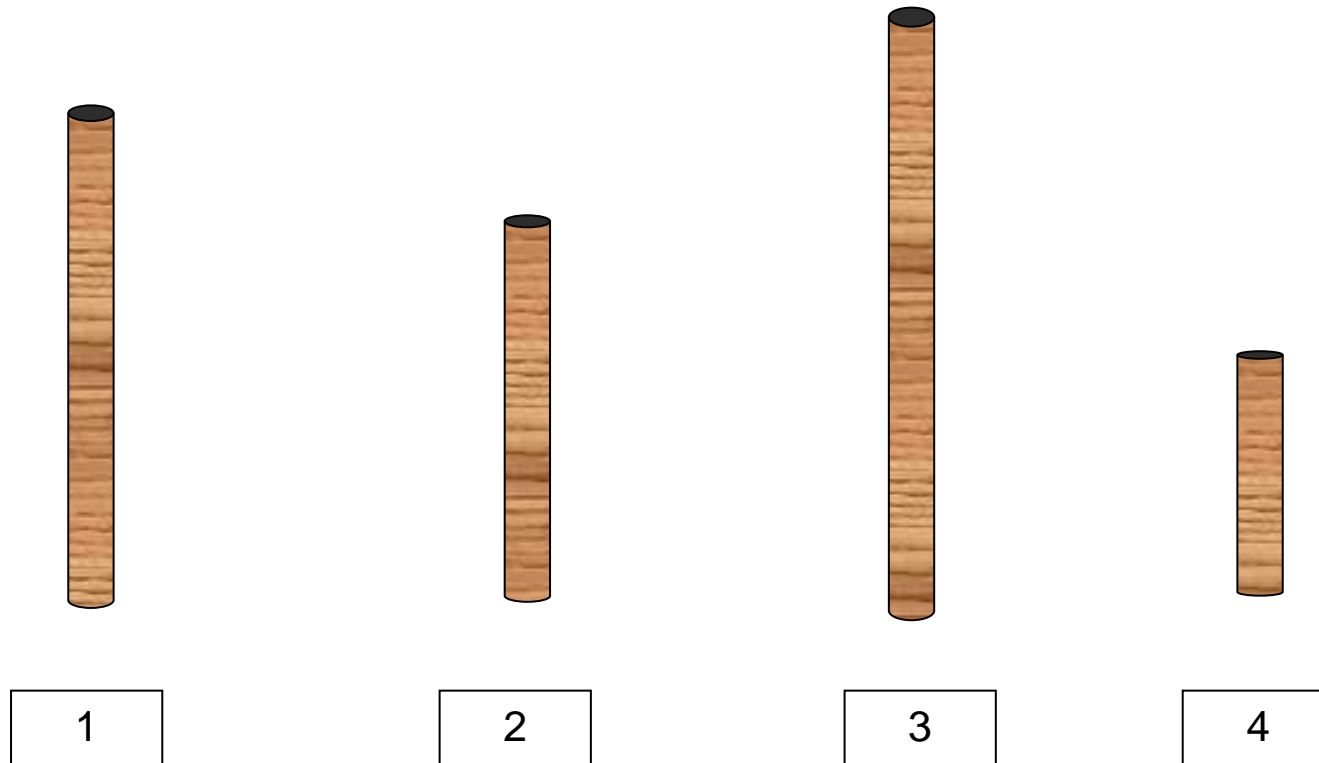
### Task 8

(3 marks)

Dan and Ali have to sort out the garden canes. They have to put them in **order of height**.

They must start with the **shortest first**.

Show how they would do this. Draw a line to match each cane to a box.



### Task 9

(2 marks)

These fence boards are all made of the same wood.

Ali has been told he must not try to move the heaviest one.

Ali isn't sure which will be the heaviest.

Which do you think will be the heaviest and why? Put your answers on the next page.



**A**



**B**



**C**



**D**

## Answers

---

---

---

---

## Task 10

(3 marks)

Ali has to put the flowering plants onto the shelf display.

They should be displayed on the long, low shelf.

Tick the box to show your answers.

a. Which is the longest shelf?

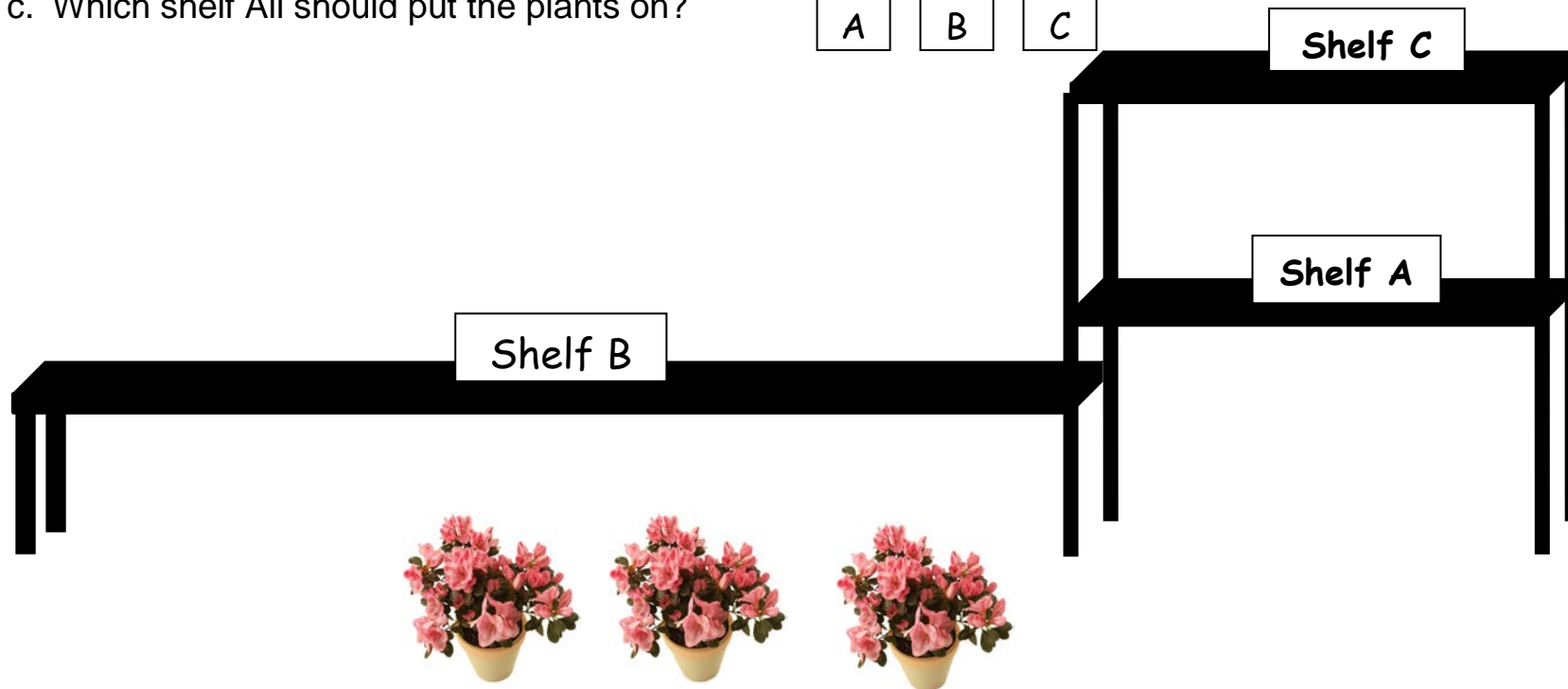
A	B	C
---	---	---

b. Which is the highest shelf?

A	B	C
---	---	---

c. Which shelf Ali should put the plants on?

A	B	C
---	---	---



## Task 11

(4 marks)

These new fish tanks need labels  
Match the labels to the tanks.

**A**

**The Sphere**  
looks like a ball.  
Good for small  
spaces  
**£25**

**B**

**The Cube**  
has a square  
base  
Good for small  
spaces  
**£45**

**C**

**The Cylinder**  
is tall with a  
curved surface  
**£75**

**D**

**The Cuboid**  
is a long tank.  
Good for bigger  
spaces  
**£95**



Images from [www.forsterstpets.co.uk](http://www.forsterstpets.co.uk), [www.fishtanks.net](http://www.fishtanks.net), <http://www.home-aquarium-store.co.uk/>, <http://www.thatpetplace.com/pet/prod/252648/product.web>