


Can you find  
the number

67

on the  
number line?



Can you find  
the number

73

on the  
number line?



Can you find  
the number

54


on the  
number line?



Can you find  
the number

88


on the  
number line?



Can you find  
the number

26


on the  
number line?



Can you find  
the number

15

on the  
number line?



Can you find  
the number

39


on the  
number line?



Can you find  
the number

42


on the  
number line?



Can you find  
the numbers

17 and 21


on the  
number line?



Can you find  
the numbers

24 and 35


on the  
number line?



Can you find  
the numbers

36 and 41


on the  
number line?



Can you find  
the numbers

44 and 49


on the  
number line?



Can you find  
the numbers

55 and 62


on the  
number line?



Can you find  
the numbers

67 and 73


on the  
number line?



Can you find  
the numbers

79 and 86

on the  
number line?



Can you find  
the numbers

81 and 91

on the  
number line?

